




NAME _____ DATE _____

ADDITION WORDS PROBLEMS (ADDING 2 NUMBERS)


Change the picture to make a ten. Write the easier number sentence and solve.

Example:

1. Kate has 7 sparrows and 6 pigeons. How many birds does Kate have?

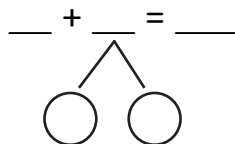



$$\underline{7} + \underline{6} = \underline{13}$$



$$\underline{10} + \underline{3} = \underline{13}$$

2. Tom has 8 strawberries and his friend has 7 strawberries. How many strawberries Tom and his friend have?



$$\underline{10} + \underline{\quad} = \underline{\quad}$$